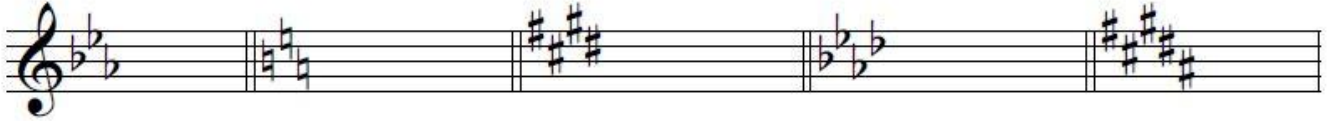





Name the Key Signature:



11.

Draw the Key Signature:



12.

C Major has _____ sharps/flats.

Bb Major has _____ sharps/flats.

G Major has _____ sharps/flats.

Ab Major has _____ sharps/flats.

Eb Major has _____ sharps/flats.

F Major has _____ sharps/flats.

D Major has _____ sharps/flats.

B Major has _____ sharps/flats.

E Major has _____ sharps flats.

A Major has _____ sharps flats.

13. What do you add to a major key signature to make it minor? _____

14. What do you add to a minor key signature to make it major? _____

15. The minor key with the same key signature as C Major is what? _____

16. The minor key with the same key signature as Bb Major is what? _____